

Free Questions for CABA

Shared by Sanford on 04-10-2024

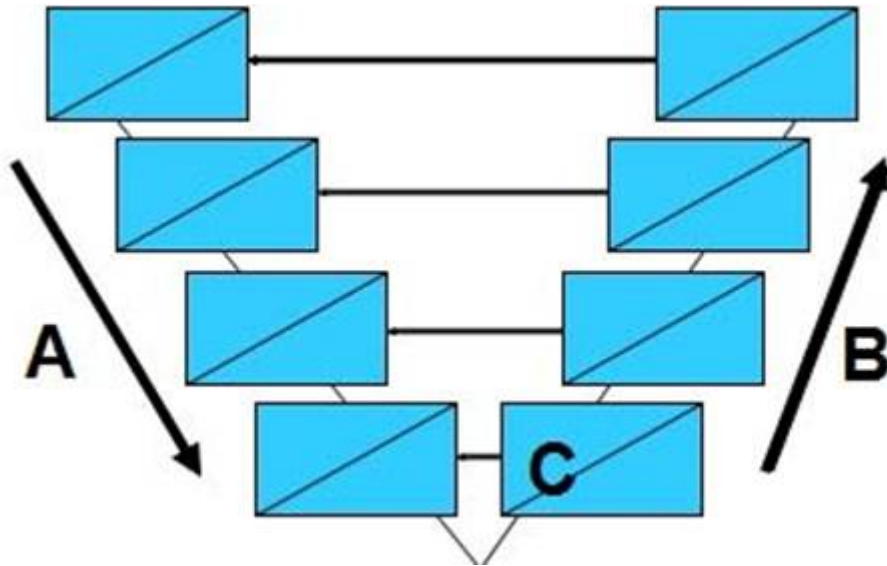
For More Free Questions and Preparation Resources

Check the Links on Last Page

Question 1

Question Type: MultipleChoice

-- Exhibit -



Using the "V" Model diagram, what type of testing activity is represented by the letter A?

Options:

A- Verification or Static

- B- Validation or Dynamic
- C- White Box
- D- Boundary Analysis
- E- User Acceptance Testing

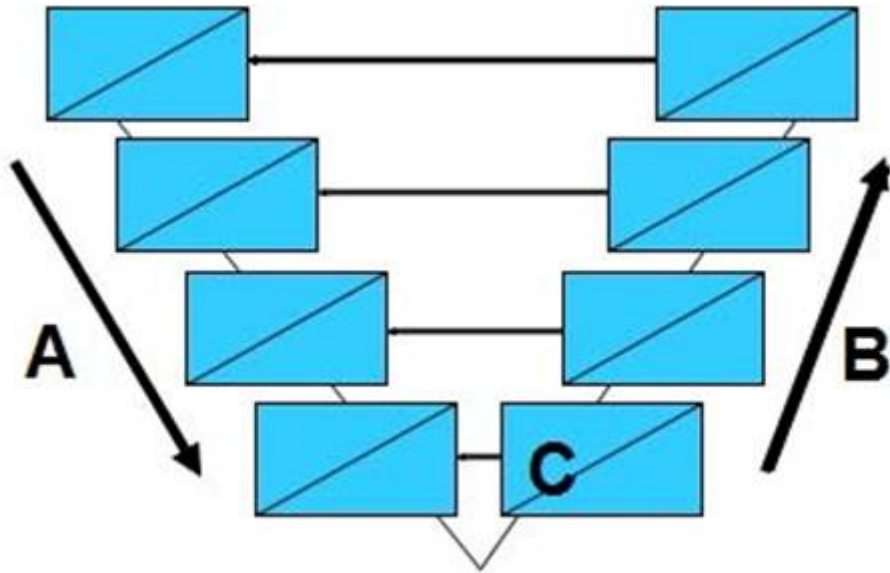
Answer:

A

Question 2

Question Type: MultipleChoice

-- Exhibit --



Using the "V" Model diagram, what testing phase is represented by the letter C?

Options:

- A- Integration
- B- Requirements Walkthrough
- C- User Acceptance Testing
- D- Unit Testing

Answer:

D

Question 3

Question Type: MultipleChoice

-- Exhibit -



With regards to Entity Relationship Diagrams, the diagram is a:

Options:

- A- One to one
- B- One to zero or one
- C- One to many
- D- One to zero or many


Answer:

C

Question 4

Question Type: MultipleChoice

-- Exhibit -



The diagram is a:

Options:

- A- Configuration Management Artifacts Map
- B- Screen Play Script Mapping Diagram
- C- Use Case Boundary Diagram
- D- Unit Testing Flow Diagram
- E- Unit Level Process Map

Answer:

E

Question 5

Question Type: MultipleChoice

-- Exhibit -

INSPECTION DATA				
Project Name	# Requirements Inspected	Hours	Defects Found	Escaped
A	214	12	32	1
B	402	20	84	2
C	47	3	11	0
D	135	6	38	1
E	369	18	91	2
F	95	5	27	0
G	117	6	32	1
H	187	9	52	1
I	256	12	74	1
	1822	91	441	9
	Inspection Rate	20.02	Escape Rate	2.04%

In the table, the number 20.2, which represents the inspection rate, is a:

Options:

- A- Metric
- B- Correlation Coefficient
- C- Measure

D- Variability Factor

Answer:

A

Question 6

Question Type: MultipleChoice

-- Exhibit -

INSPECTION DATA				
Project Name	# Requirements Inspected	Hours	Defects Found	Escaped
A	214	12	32	1
B	402	20	84	2
C	47	3	11	0
D	135	6	38	1
E	369	18	91	2
F	95	5	27	0
G	117	6	32	1
H	187	9	52	1
I	256	12	74	1
	1822	91	441	9
	Inspection Rate	20.02	Escape Rate	2.04%

In the table, the column labeled "Number of Requirements Inspected" records a:

Options:

- A- Metric
- B- Correlation Coefficient
- C- Measure

D- Variability Factor

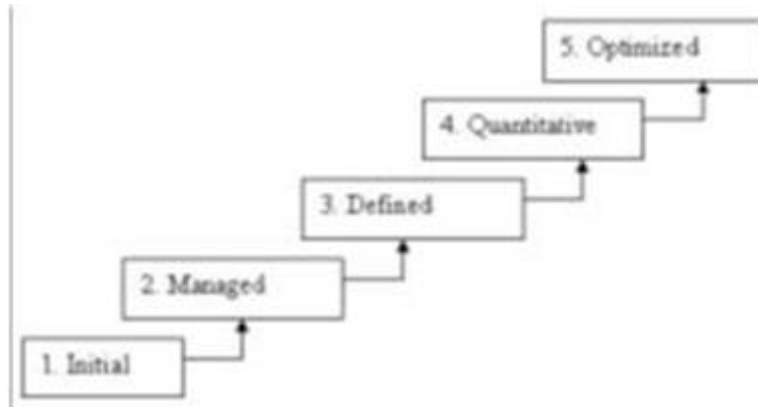
Answer:

C

Question 7

Question Type: MultipleChoice

-- Exhibit -



The diagram is of the:

Options:

A- ISO 9000

B- Malcolm Balridge Model

C- Capability Maturity Model Integrated

D- Process Workbench

E- None of the above

Answer:

C

To Get Premium Files for CABA Visit

<https://www.p2pexams.com/products/caba>

For More Free Questions Visit

<https://www.p2pexams.com/peoplecert/pdf/caba>

