



Free Questions for OG0-021 by vceexamstest

Shared by Daugherty on 24-05-2024

For More Free Questions and Preparation Resources

Check the Links on Last Page

Question 1

Question Type: MultipleChoice

What Implementation & Migration Extension concept is used to model the outcome of an analysis of the differences between two architectural states?

Options:

- A- Transition
- B- Gap
- C- Work Package
- D- Deliverable

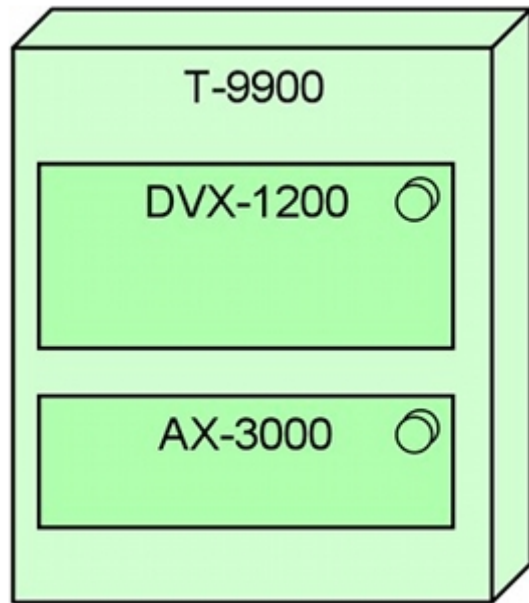
Answer:

B

Question 2

Question Type: MultipleChoice

The diagram below shows key elements of the configuration of ArchiSurance's newest and most powerful high-end server, which is a model T-9900:



Which of the following descriptions of the configuration is most consistent with the diagram?

Options:

A- The T-9900 is fitted with a DVX-1200 cooling system and and AX-3000 onboard disk array

B- The T-9900 is running PRO-FIT's custom, internally-developed DVX-1200 software for enterprise risk analysis and is fitted with an AX-3000 onboard disk array

- C-** The T-9900 node is running DVX-1200 middleware and the AX-3000 operating system software
- D-** The T-9900 is an assembly of DVX-1200 processing units and AX-3000 high-speed memory arrays

Answer:

C

Question 3

Question Type: MultipleChoice

Which Implementation and Migration Extension viewpoint is used to model the management of architecture change?

Options:

- A-** Migration viewpoint
- B-** Implementation and Migration viewpoint
- C-** Business Function viewpoint
- D-** Project viewpoint

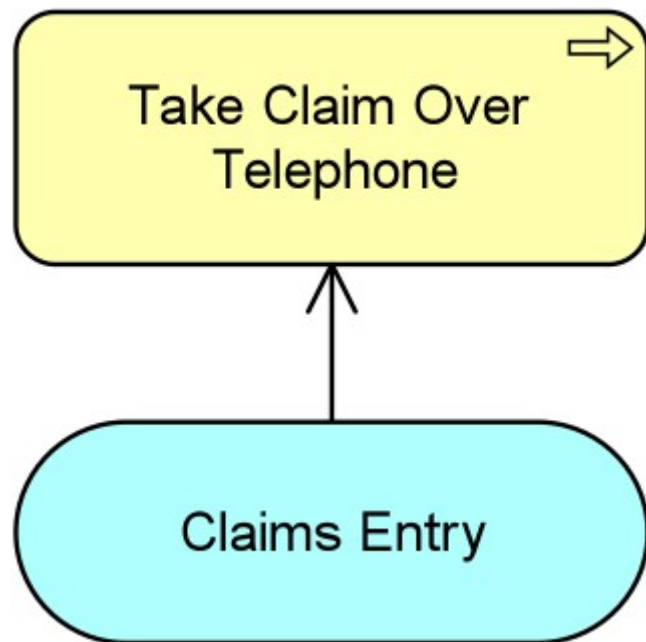
Answer:

D

Question 4

Question Type: MultipleChoice

Consider the following diagram:



Which of the following answers best interprets the diagram?

Options:

- A- The Claims Entry application service realizes the Take Claim Over Telephone business process
- B- The Claims Entry application service is used by the Take Claim Over Telephone business process
- C- Information flows from the Claims Entry application to the Take Claim Over Telephone business process
- D- The Claims Entry business service is used by the Take Claim Over Telephone team

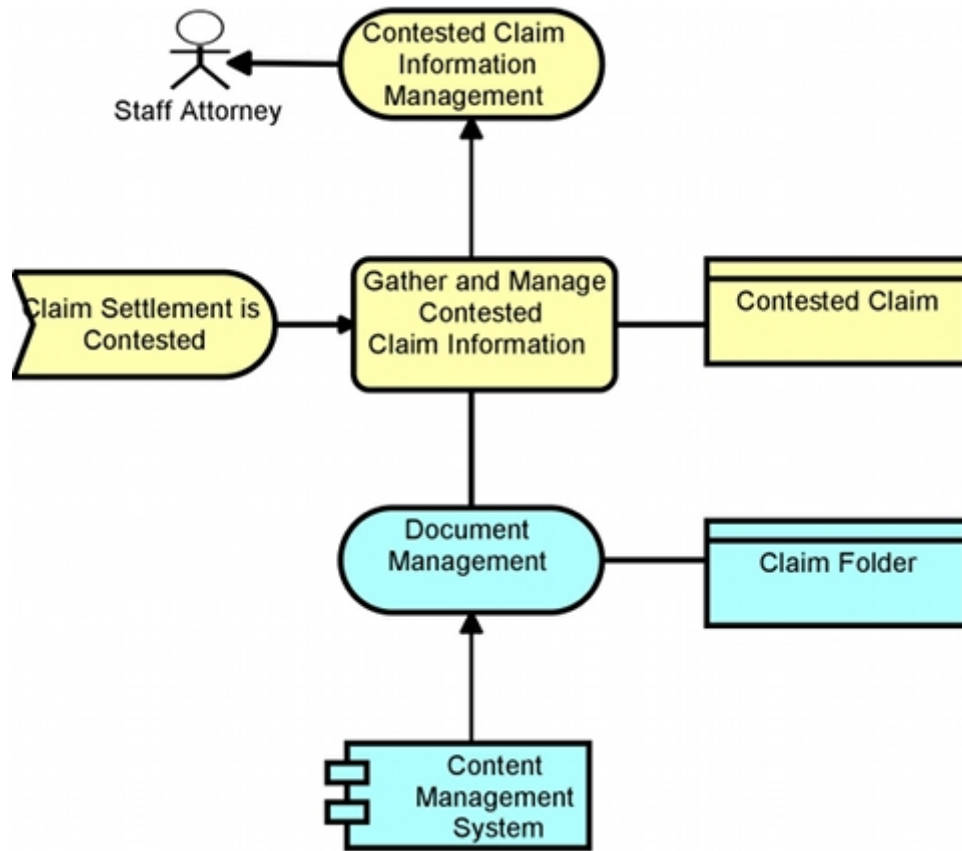
Answer:

B

Question 5

Question Type: MultipleChoice

Consider the following diagram, which conforms to a standard ArchiMate viewpoint that uses a simplified notation:



To which standard ArchiMate viewpoint does this diagram conform?

Options:

A- Elementary viewpoint

- B- Introductory viewpoint
- C- Coherence viewpoint
- D- Deciding viewpoint

Answer:

B

Question 6

Question Type: MultipleChoice

At ArchiSurance, risk assessment is part of an activity used to determine the adequacy of the company's financial reserves against future claims and fluctuations in the value of its investments.



Which ArchiMate relationship should be used to express the forwarding of risk assessment findings for the reserve evaluation process?

Options:

A- Access

B- Assignment

C- Association

D- Flow

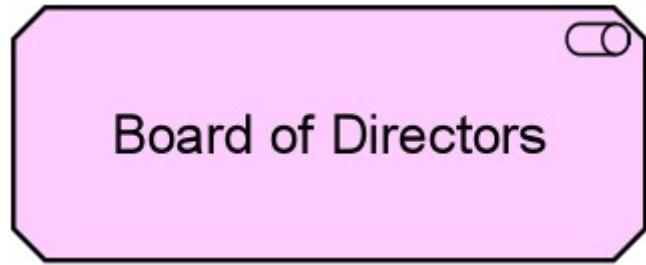
Answer:

D

Question 7

Question Type: MultipleChoice

Consider the following symbol, which represents information about a transformation project at ArchiSurance involving systems and business processes:



Which of the following statements correctly expresses the meaning of the symbol?

Options:

- A- The Board of Directors will use the transformed systems
- B- The Board of Directors has a business role in the project
- C- The transformed systems will store information of interest to the Board of Directors
- D- The Board of Directors has concerns about the project

Answer:

D

Question 8

Question Type: MultipleChoice

Which concept is typically used to model hardware systems such as mainframes, PCs, or routers?

Options:

A- System software

B- Network

C- Artifact

D- Device

Answer:

D

To Get Premium Files for OG0-021 Visit

<https://www.p2pexams.com/products/og0-021>

For More Free Questions Visit

<https://www.p2pexams.com/the-open-group/pdf/og0-021>

